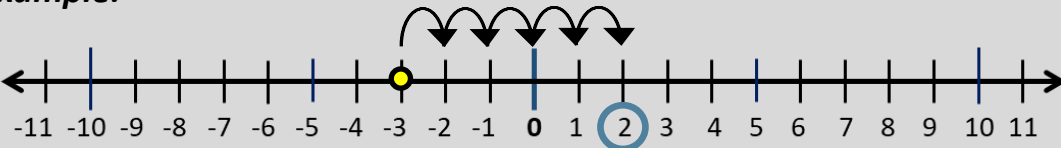


Adding and subtracting with number lines

Grade 5 Integers Worksheet

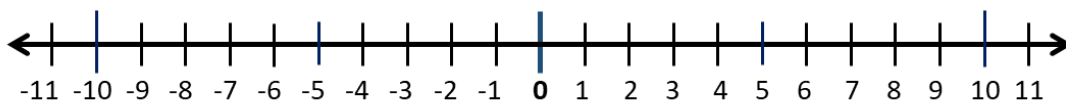
Solve the following by drawing hops on the number line.

Example:



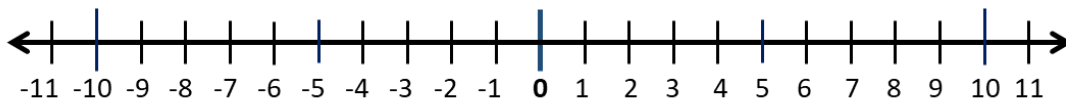
$-3 + 5 = \underline{2}$

1.



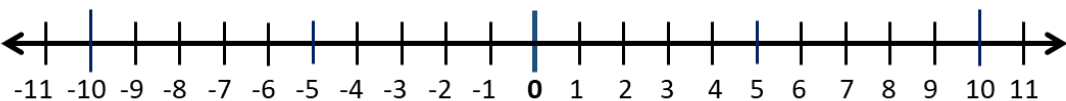
$$-4 - (-6) = \underline{\quad}$$

2.



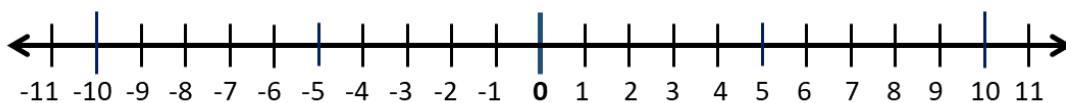
$$5 + (-8) = \underline{\quad}$$

3.



$$-8 + 3 = \underline{\quad}$$

4.



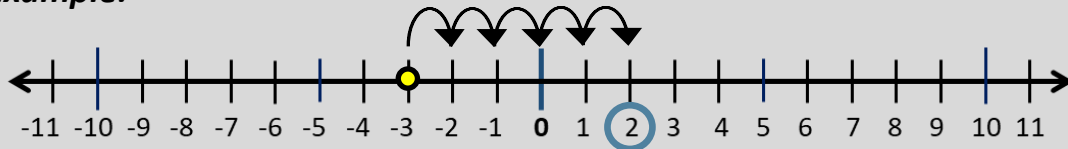
$$-3 - (-5) = \underline{\quad}$$

Adding and subtracting with number lines

Grade 5 Integers Worksheet

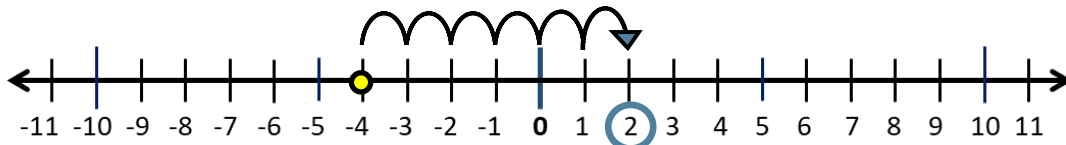
Answers:

Example:



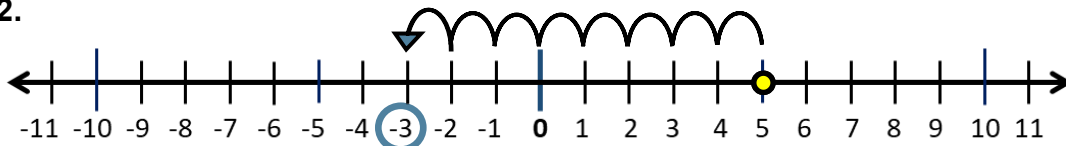
$$-3 + 5 = \underline{2}$$

1.



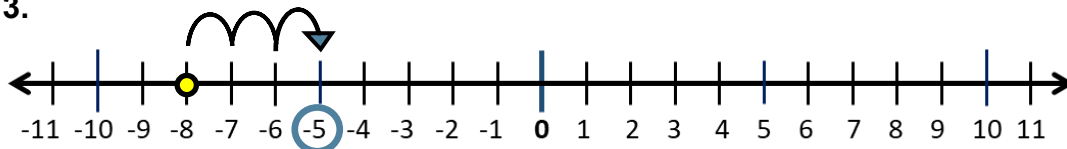
$$-4 - (-6) = \underline{2}$$

2.



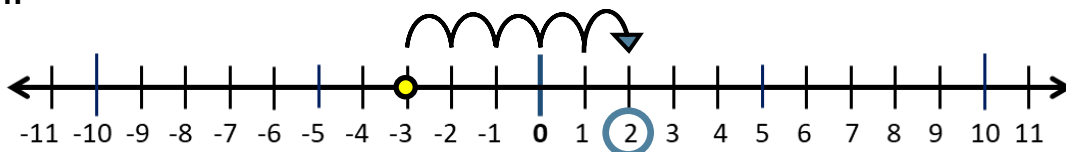
$$5 + (-8) = \underline{-3}$$

3.



$$-8 + 3 = \underline{-5}$$

4.



$$-3 - (-5) = \underline{2}$$