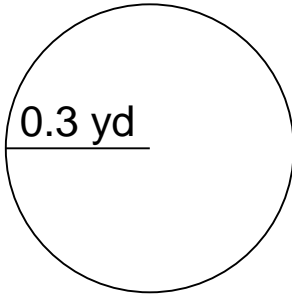


Area of a circle

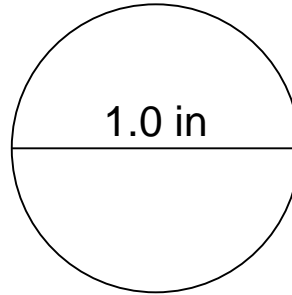
Grade 6 Geometry Worksheet

Calculate the area of each circle.

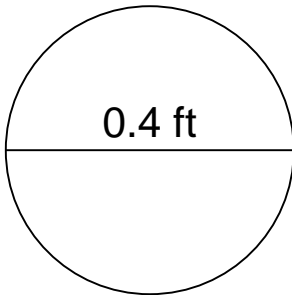
1.



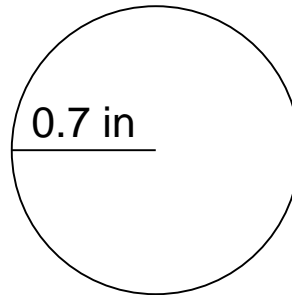
2.



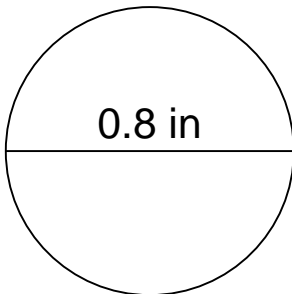
3.



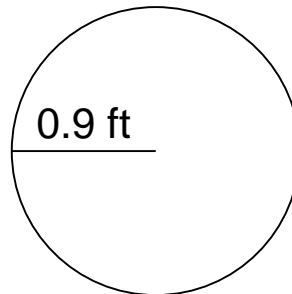
4.



5.



6.

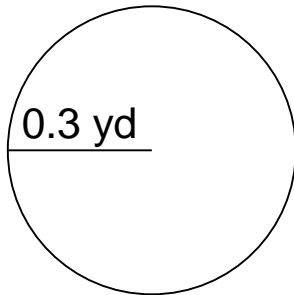


Area of a circle

Grade 6 Geometry Worksheet

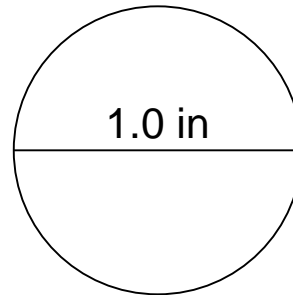
Calculate the area of each circle.

1.



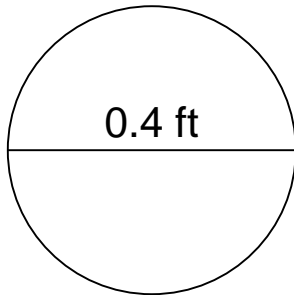
$A=0.2826 \text{ yd}^2$

2.



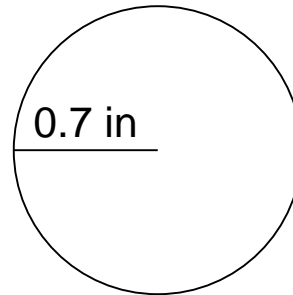
$A=0.7850 \text{ in}^2$

3.



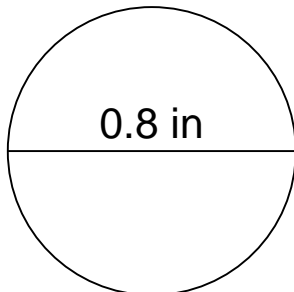
$A=0.1256 \text{ ft}^2$

4.



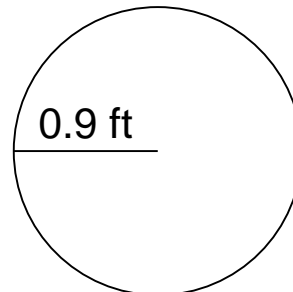
$A=1.5386 \text{ in}^2$

5.



$A=0.5024 \text{ in}^2$

6.



$A=2.5434 \text{ ft}^2$