

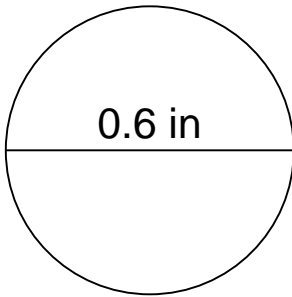
## Area of a circle

---

### Grade 6 Geometry Worksheet

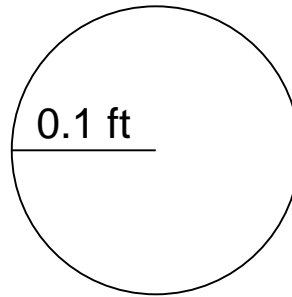
Calculate the area of each circle.

1.



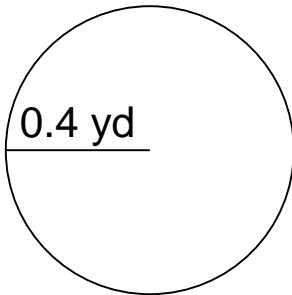
\_\_\_\_\_

2.



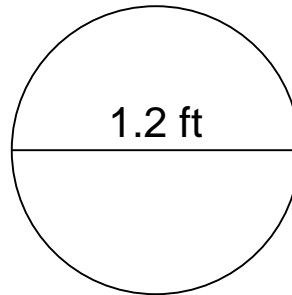
\_\_\_\_\_

3.



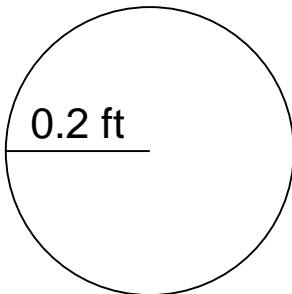
\_\_\_\_\_

4.



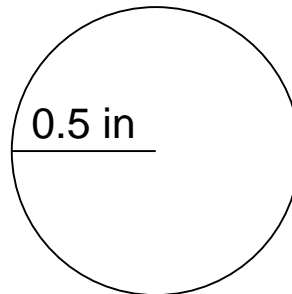
\_\_\_\_\_

5.



\_\_\_\_\_

6.



\_\_\_\_\_

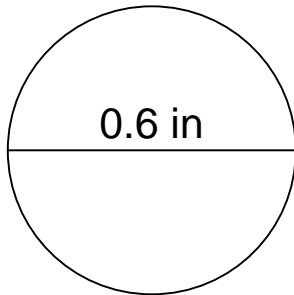
## Area of a circle

---

### Grade 6 Geometry Worksheet

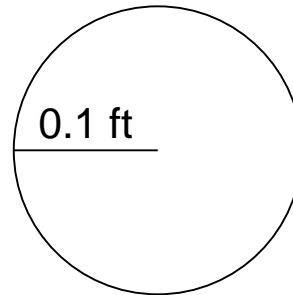
Calculate the area of each circle.

1.



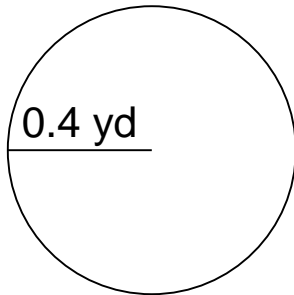
$A=0.2826 \text{ in}^2$

2.



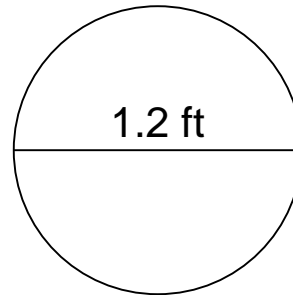
$A=0.0314 \text{ ft}^2$

3.



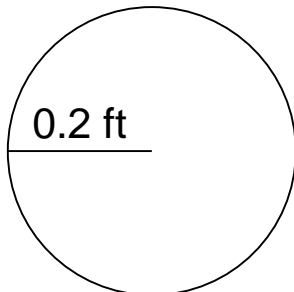
$A=0.5024 \text{ yd}^2$

4.



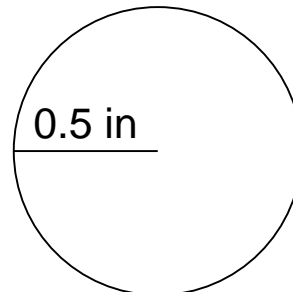
$A=1.1304 \text{ ft}^2$

5.



$A=0.1256 \text{ ft}^2$

6.



$A=0.7850 \text{ in}^2$