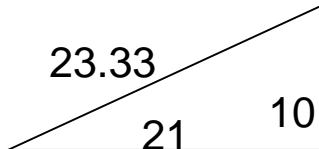


Area of right triangles

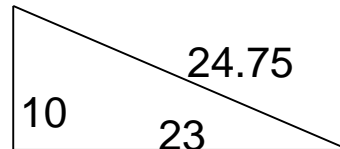
Grade 6 Geometry Worksheet

Find the area.

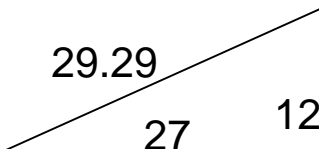
1.



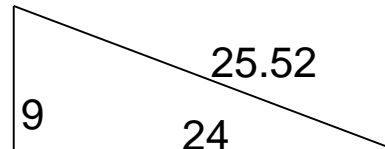
4.



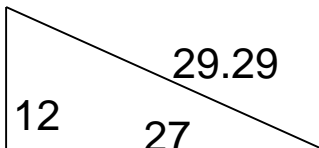
2.



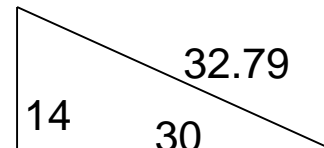
5.



3.



6.

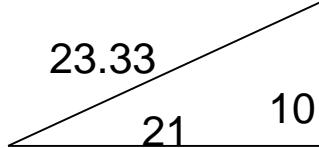


Area of right triangles

Grade 6 Geometry Worksheet

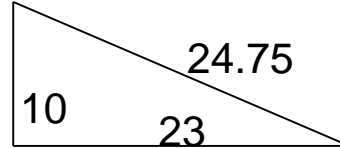
Find the area.

1.



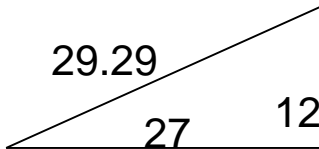
$A = 105$

4.



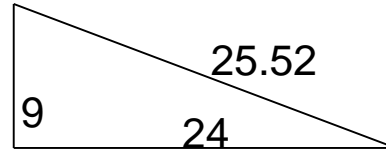
$A = 115$

2.



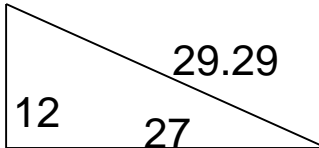
$A = 162$

5.



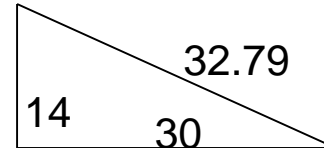
$A = 108$

3.



$A = 162$

6.



$A = 210$
