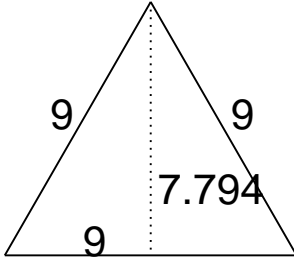


# Area of Triangles

## Grade 6 Geometry Worksheet

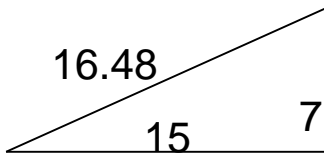
Find the area.

1.



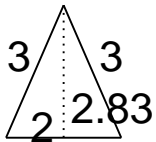

---

2.



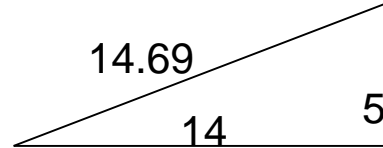

---

3.



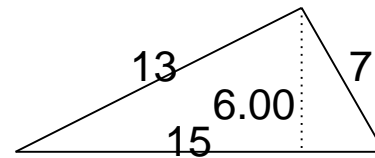

---

4.



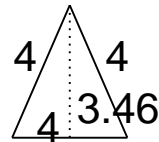

---

5.




---

6.



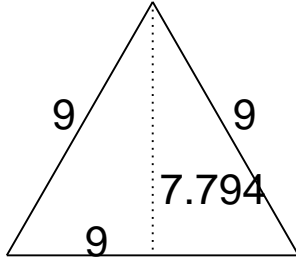

---

# Area of Triangles

## Grade 6 Geometry Worksheet

Find the area.

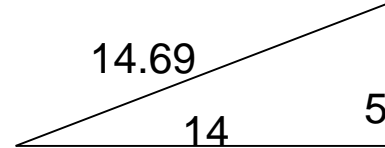
1.



$$A = 35.07$$


---

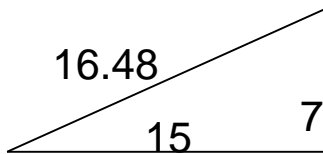
4.



$$A = 35$$


---

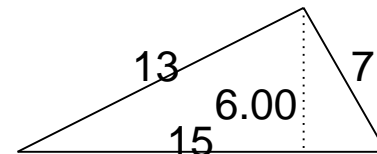
2.



$$A = 52.5$$


---

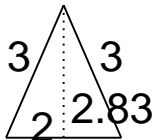
5.



$$A = 45$$


---

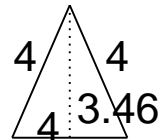
3.



$$A = 2.83$$


---

6.



$$A = 6.92$$


---