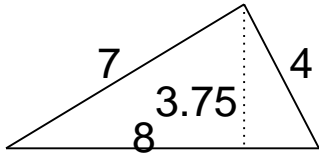


Area of triangles and quadrilaterals

Grade 6 Geometry Worksheet

Find the area.

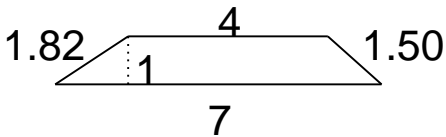
1.



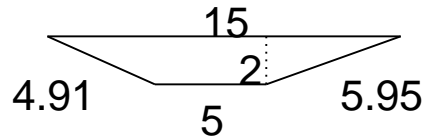
4.



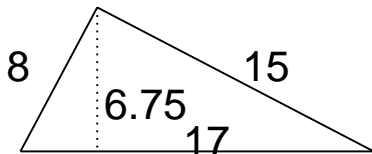
2.



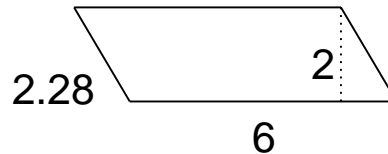
5.



3.



6.

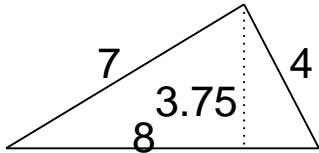


Area of triangles and quadrilaterals

Grade 6 Geometry Worksheet

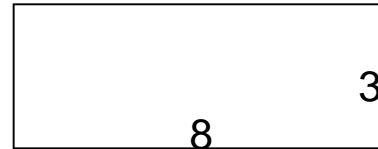
Find the area.

1.



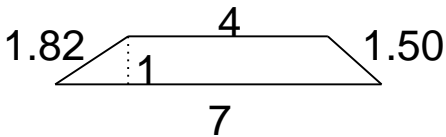
$$A = 15$$

4.



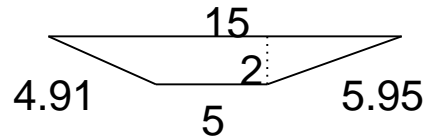
$$A = 24$$

2.



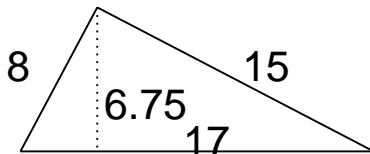
$$A = 6$$

5.



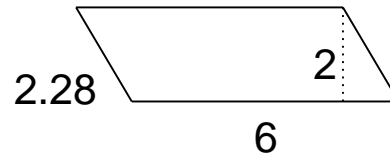
$$A = 20$$

3.



$$A = 57.38$$

6.



$$A = 12$$
