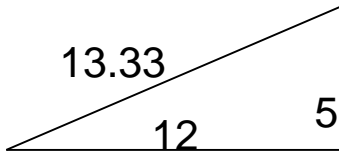


Area of Triangles

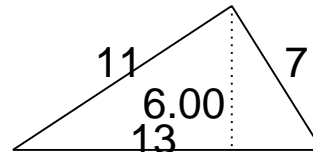
Grade 6 Geometry Worksheet

Find the area.

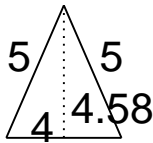
1.



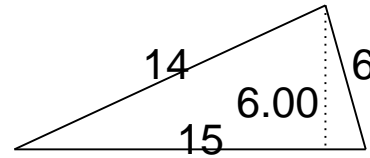
4.



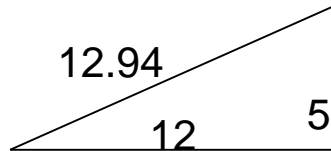
2.



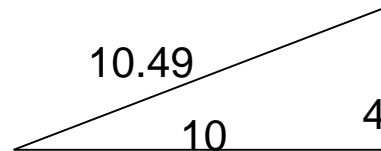
5.



3.



6.

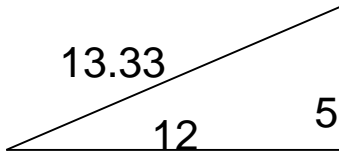


Area of Triangles

Grade 6 Geometry Worksheet

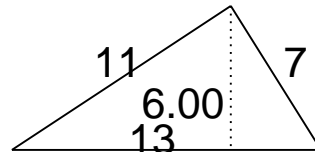
Find the area.

1.



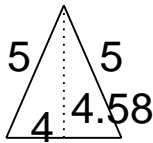
$A = 30$

4.



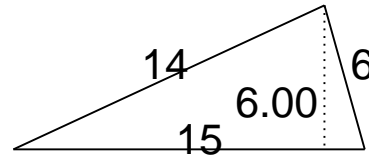
$A = 39$

2.



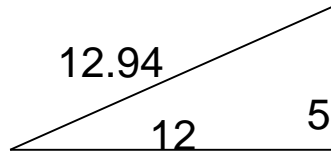
$A = 9.16$

5.



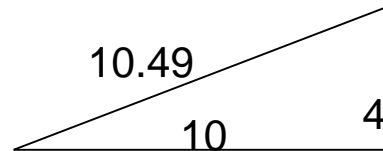
$A = 45$

3.



$A = 30$

6.



$A = 20$
