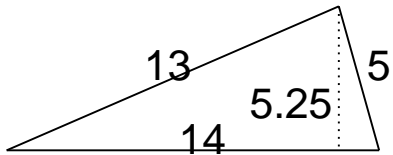


Area of triangles, parallelograms & trapezoids

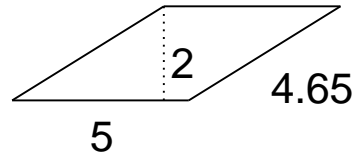
Grade 6 Geometry Worksheet

Find the area.

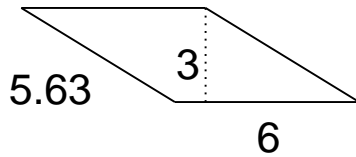
1.



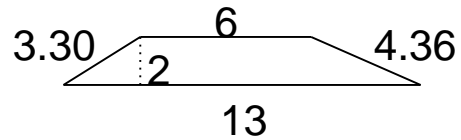
4.



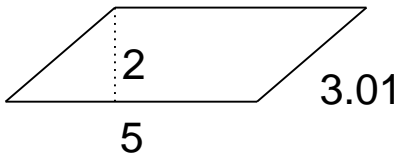
2.



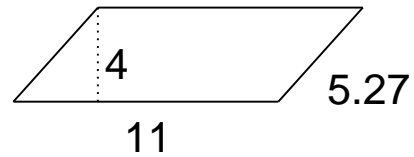
5.



3.



6.

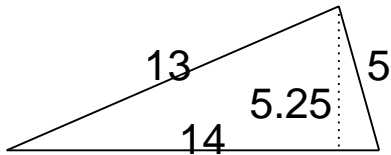


Area of triangles, parallelograms & trapezoids

Grade 6 Geometry Worksheet

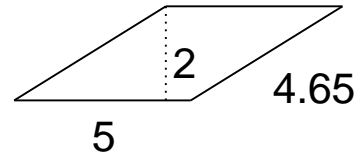
Find the area.

1.



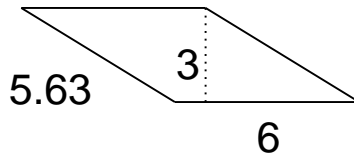
$$A = 36.75$$

4.



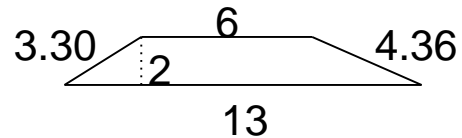
$$A = 10$$

2.



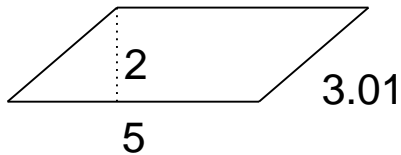
$$A = 18$$

5.



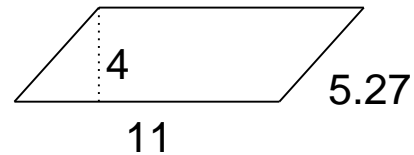
$$A = 19$$

3.



$$A = 10$$

6.



$$A = 44$$
