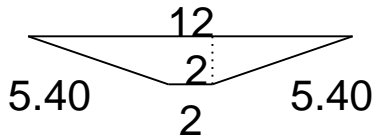


# Area of triangles, parallelograms & trapezoids

## Grade 6 Geometry Worksheet

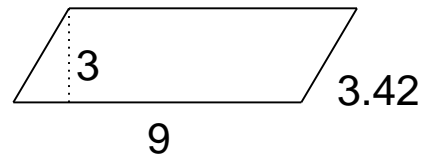
Find the area.

1.



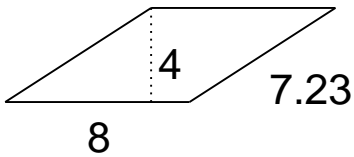

---

4.



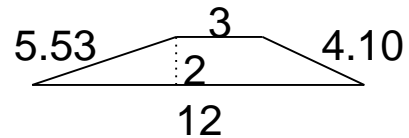

---

2.



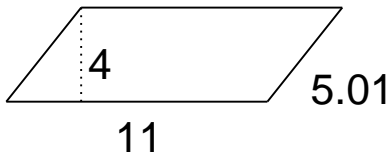

---

5.



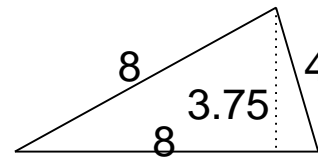

---

3.




---

6.



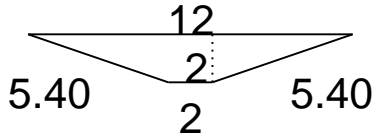

---

# Area of triangles, parallelograms & trapezoids

## Grade 6 Geometry Worksheet

Find the area.

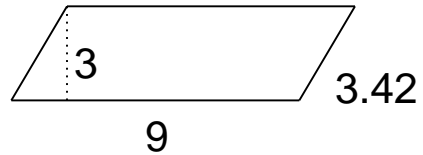
1.



$$A = 14$$


---

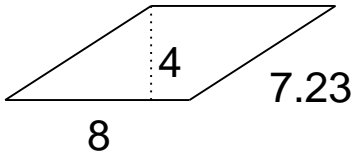
4.



$$A = 27$$


---

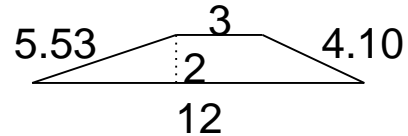
2.



$$A = 32$$


---

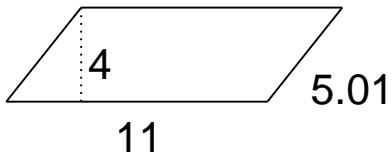
5.



$$A = 15$$


---

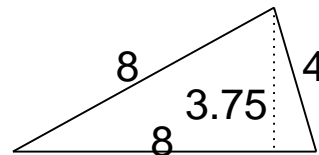
3.



$$A = 44$$


---

6.



$$A = 15$$


---