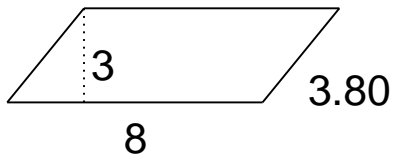


Area of triangles, parallelograms & trapezoids

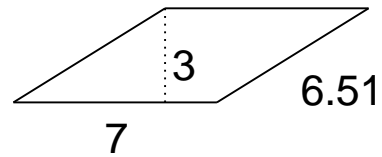
Grade 6 Geometry Worksheet

Find the area.

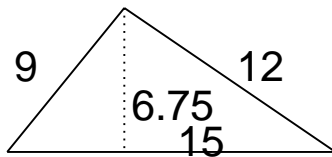
1.



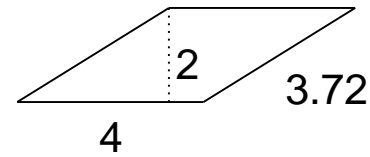
4.



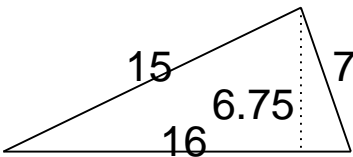
2.



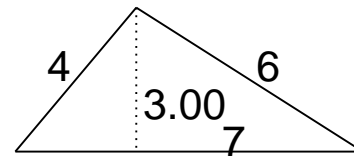
5.



3.



6.

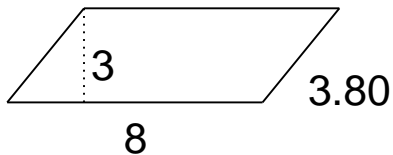


Area of triangles, parallelograms & trapezoids

Grade 6 Geometry Worksheet

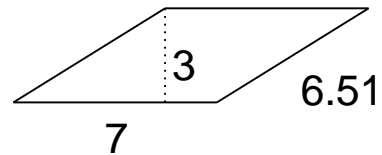
Find the area.

1.



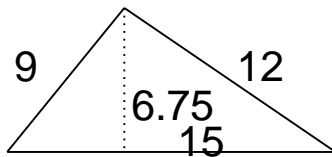
$A = 24$

4.



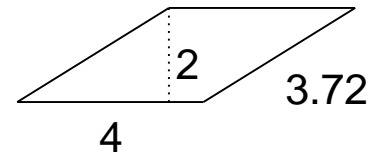
$A = 21$

2.



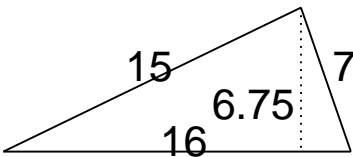
$A = 50.62$

5.



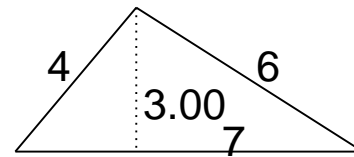
$A = 8$

3.



$A = 54$

6.



$A = 10.5$
