

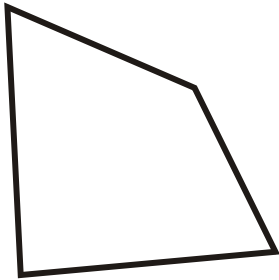
# Types of Quadrilaterals

---

## Grade 6 Geometry Worksheet

Identify the type of quadrilateral.

1.



\_\_\_\_\_

2.




\_\_\_\_\_

3.



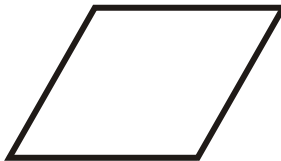
\_\_\_\_\_

4.



\_\_\_\_\_

5.



\_\_\_\_\_

6.



\_\_\_\_\_

7.



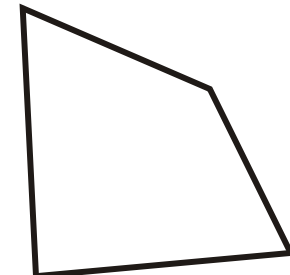
\_\_\_\_\_

8.



\_\_\_\_\_

9.



\_\_\_\_\_

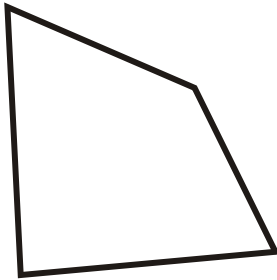
## Types of Quadrilaterals

---

### Grade 6 Geometry Worksheet

Identify the type of quadrilateral.

1.



Irregular Quadrilateral

2.




Parallelogram

3.



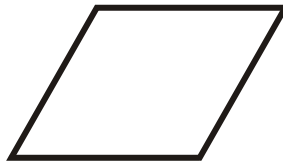
Trapezoid

4.



Square

5.



Rhombus

6.



Rectangle

7.



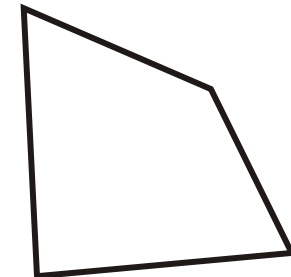
Trapezoid

8.



Parallelogram

9.



Irregular Quadrilateral