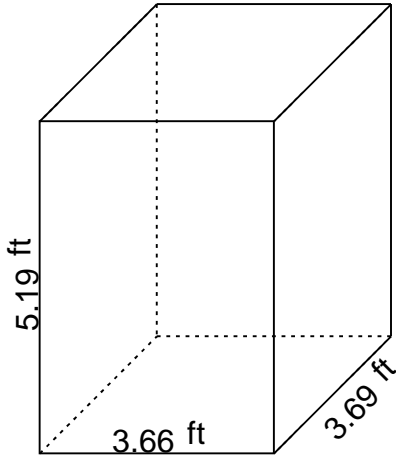


Rectangular prism - volume & surface area

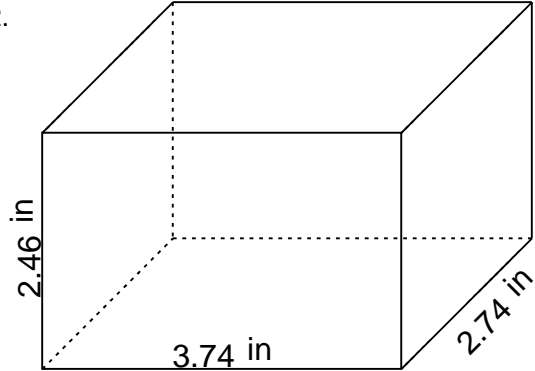
Grade 6 Geometry Worksheet

Find the volume and surface area.

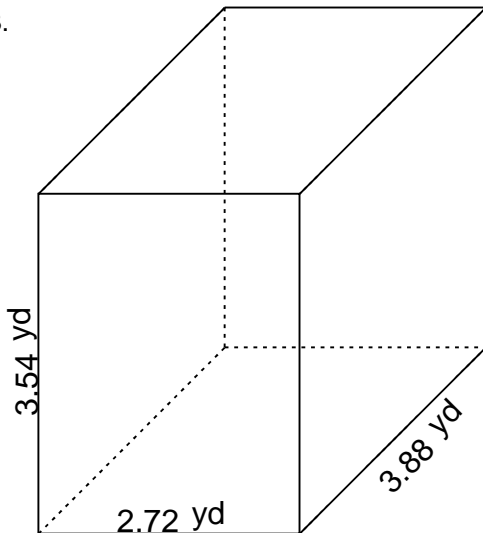
1.



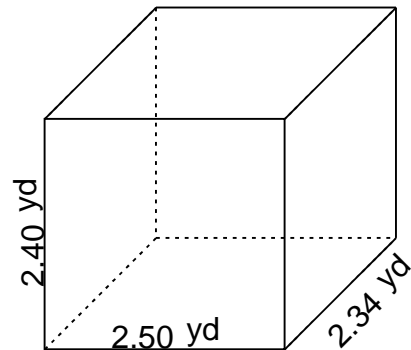
2.



3.



4.

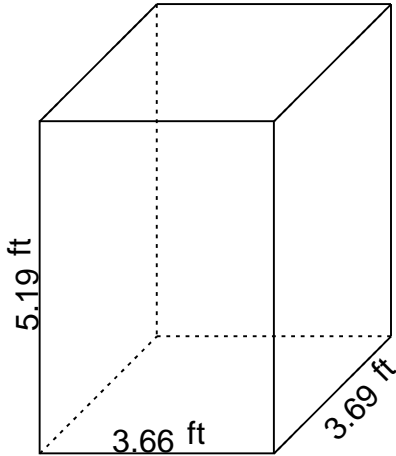


Rectangular prism - volume & surface area

Grade 6 Geometry Worksheet

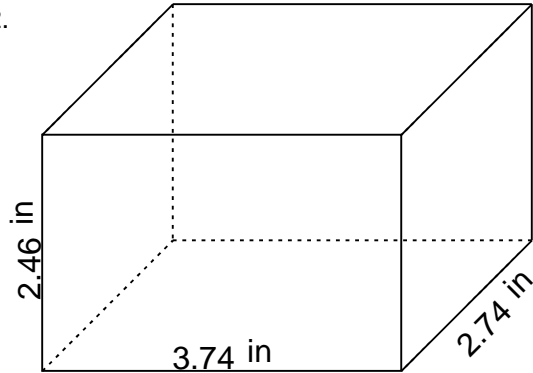
Find the volume and surface area.

1.



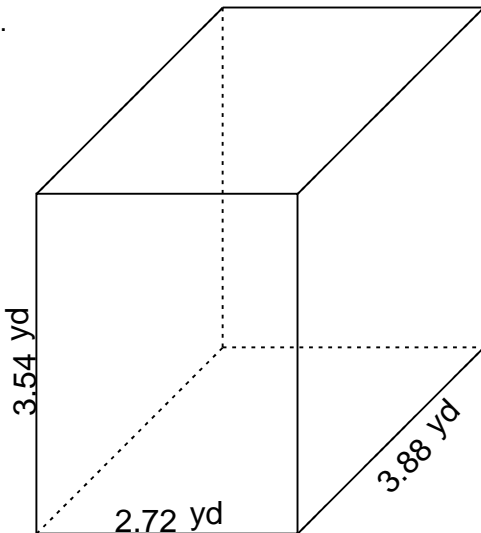
$$V = 70.093026 \text{ ft}^3 \quad SA = 103.3038 \text{ ft}^2$$

2.



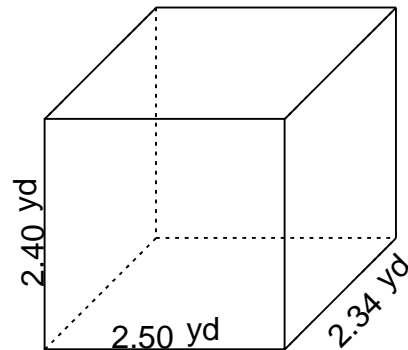
$$V = 25.209096 \text{ in}^3 \quad SA = 52.3768 \text{ in}^2$$

3.



$$V = 37.359744 \text{ yd}^3 \quad SA = 67.8352 \text{ yd}^2$$

4.



$$V = 14.040000 \text{ yd}^3 \quad SA = 34.9320 \text{ yd}^2$$