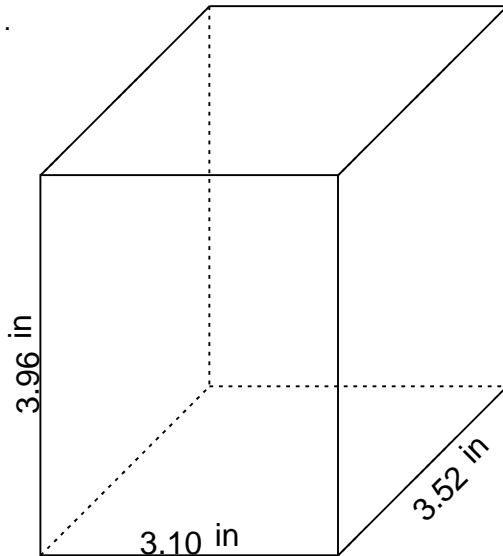


Rectangular prism - volume & surface area

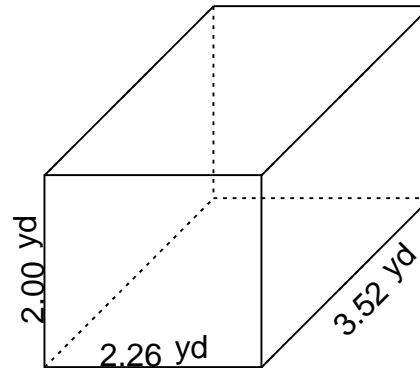
Grade 6 Geometry Worksheet

Find the volume and surface area.

1.



2.

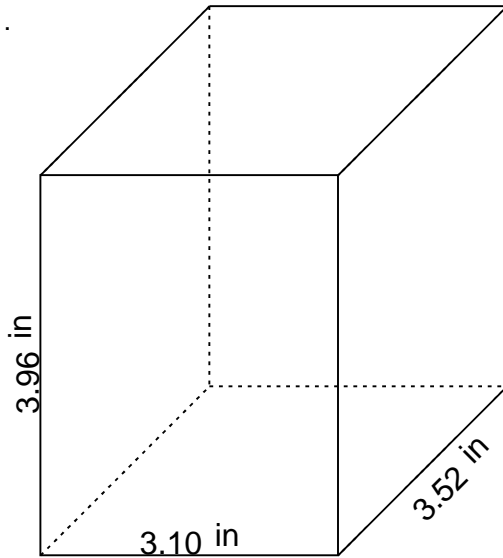


Rectangular prism - volume & surface area

Grade 6 Geometry Worksheet

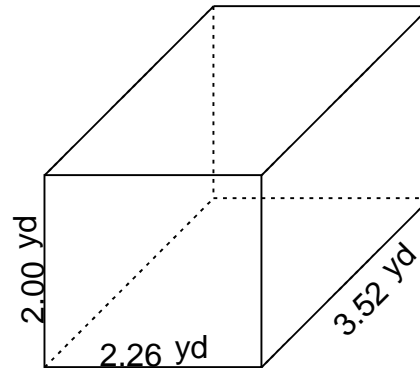
Find the volume and surface area.

1.



$$V = 43.211520 \text{ in}^3 \quad SA = 74.2544 \text{ in}^2$$

2.



$$V = 15.910400 \text{ yd}^3 \quad SA = 39.0304 \text{ yd}^2$$