

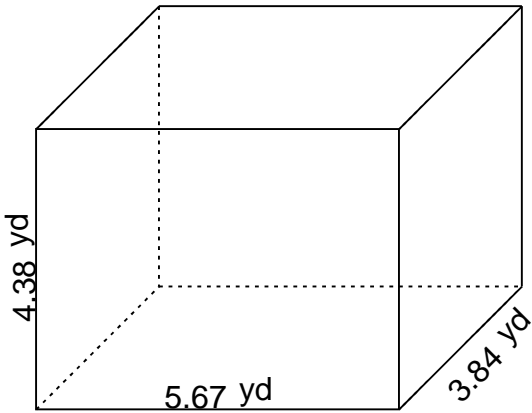
## Rectangular prism - volume & surface area

---

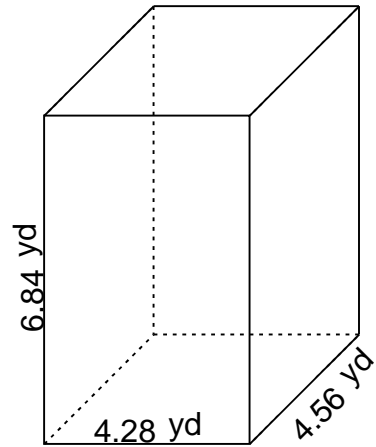
### Grade 6 Geometry Worksheet

Find the volume and surface area.

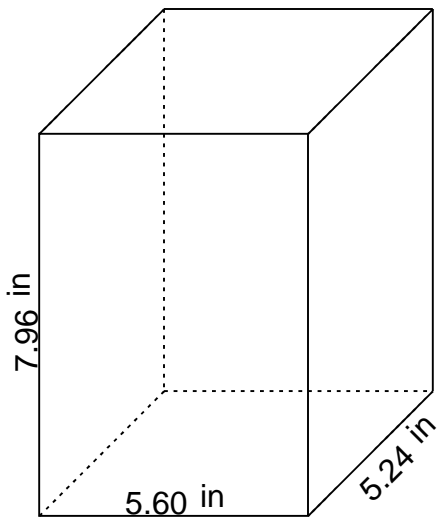
1.



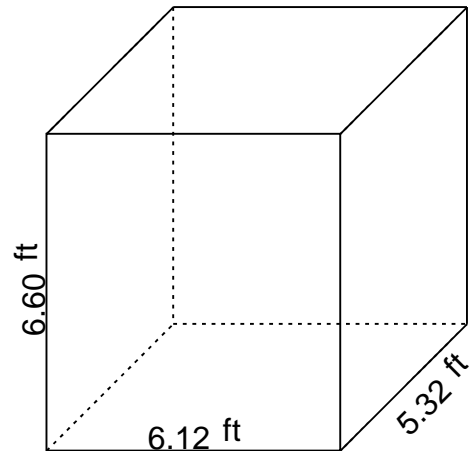
2.



3.



4.

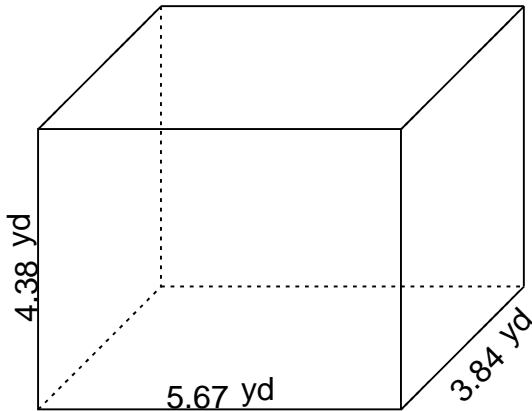


## Rectangular prism - volume & surface area

### Grade 6 Geometry Worksheet

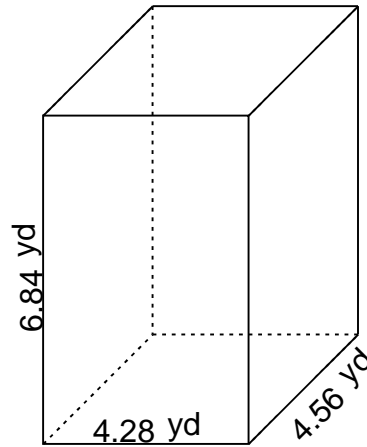
Find the volume and surface area.

1.



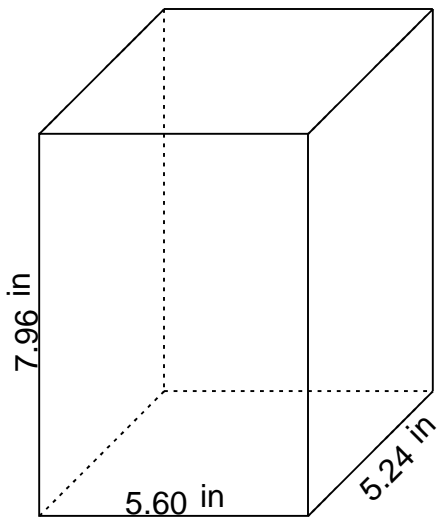
$$V = 95.364864 \text{ yd}^3 \quad SA = 126.8532 \text{ yd}^2$$

2.



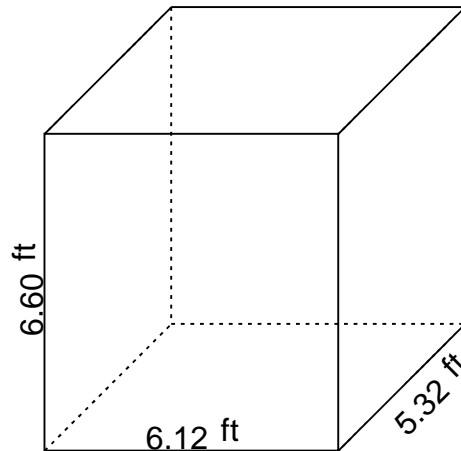
$$V = 133.494912 \text{ yd}^3 \quad SA = 159.9648 \text{ yd}^2$$

3.



$$V = 233.578240 \text{ in}^3 \quad SA = 231.2608 \text{ in}^2$$

4.



$$V = 214.885440 \text{ ft}^3 \quad SA = 216.1248 \text{ ft}^2$$