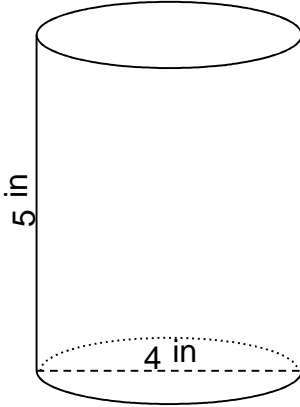


Volume & surface area of 3D shapes

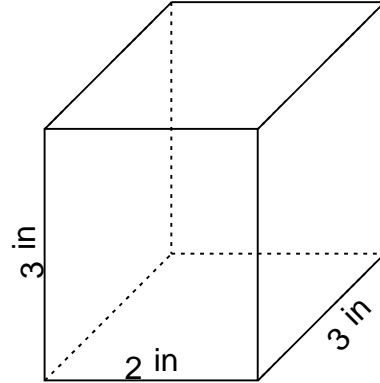
Grade 6 Geometry Worksheet

Find the volume and surface area.

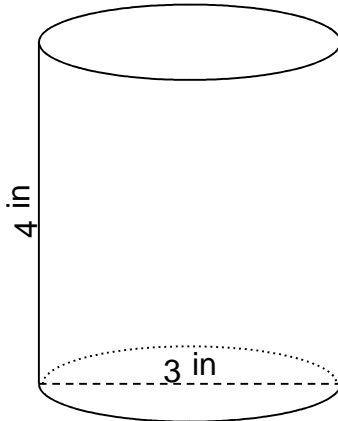
1.



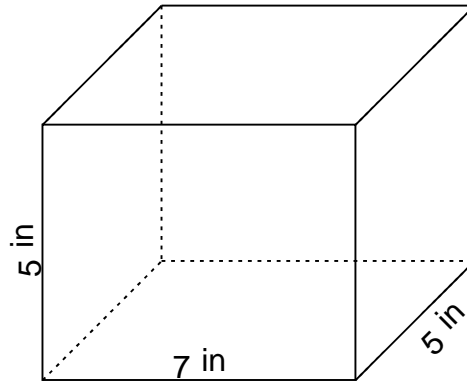
2.



3.



4.

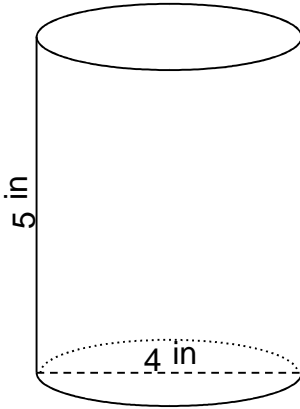


Volume & surface area of 3D shapes

Grade 6 Geometry Worksheet

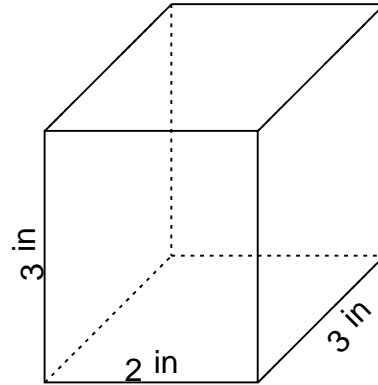
Find the volume and surface area.

1.



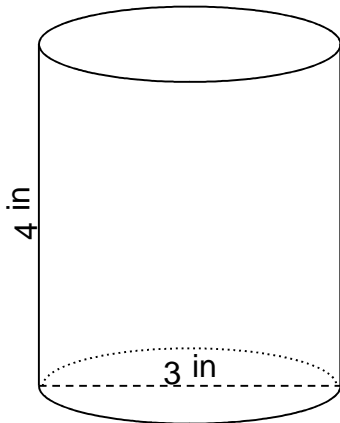
$$V = 62.83 \text{ in}^3 \quad SA = 88 \text{ in}^2$$

2.



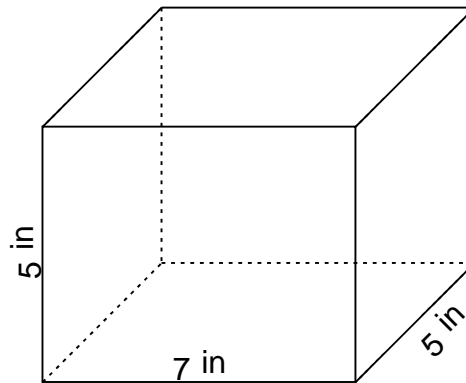
$$V = 18 \text{ in}^3 \quad SA = 42 \text{ in}^2$$

3.



$$V = 28.27 \text{ in}^3 \quad SA = 52 \text{ in}^2$$

4.



$$V = 175 \text{ in}^3 \quad SA = 190 \text{ in}^2$$